



Blue Pelican
15 Minute MathLabs
Teacher Manual

Copyright ©, 2009 by Charles Cook;
Refugio, Tx

(all rights reserved)

Preface

The concept of 15 Minute MathLabs came about as a result of a few colleagues having a discussion about how to motivate math students: what teacher hasn't had that conversation? As the argument raged back and forth, the three main ideas emerged that were seemingly at odds with each other:

*“Math projects (labs) are needed to show students the really **practical side of math**. And, besides, labs provide a little **spice and variety** to what is otherwise considered by many students as dull and irrelevant.”*

*“We must constantly hammer on the fundamentals while continuing to **move forward** through the curriculum. **Math labs take too much time**. They often require an entire period and many times the outcome is not what was predicted. Not only was instruction time lost, the whole thing was counterproductive.”*

*“It's such a **hassle trying to round up all of the items and equipment for a lab**.”*

In the grip of this impasse someone wearily suggested, “Wouldn't it be nice if we could have occasional 15 minute labs that really worked and all the equipment was right there.” ... Thus the idea was born along with the name.

The 30 labs and videos presented here have been reviewed by a number of people and occasionally prompted comments like, “*Looks like there is as much science in there as math.*” To this rather oblique “criticism” our comment is:

Yes! Thank you. The practical side of math **is** to a large extent science and engineering. After all, our math students are someone else's science students. Since science **needs** math and we **need** to show a practical side, labs that are a **mixture of both** would seem to be the perfect marriage.

Our entire philosophy concerning math labs can be summarized as:

- Provide labs that **actually work** and with **predictable results**.
- Emphasize **specific mathematics principles** in each lab.
- Relate labs to **other subject areas** such as science.
- Provide for quick and easy **teachers preparation** for the labs (videos and manual).
- Provide supplemental **in depth questions** and **calculator activities**.
- Provide a **kit of all the necessary items** for all labs.
- Confine labs to **15 minutes**... and then **right back to the regular lesson**.

Table of Contents

Lab #	Title	Page #
MathLab 01	A Cup or a Cone? <i>Finding the height of a cone:</i> (Similar triangles, ratios, solving a linear equation, reading a ruler)	ML 01-1
MathLab 02	My Cup Runneth Over <i>Find the volume of an ordinary party cup:</i> (Volume of a cone, subtracting two volumes, reading a ruler, frustrum, reading a graduated cylinder)	ML 02-1
MathLab 03	How Big is Texas? <i>Find the area in square miles of irregularly shaped area like Texas:</i> (Area of a rectangle, ratios, area of an irregular shape on a paper is proportional to the weight of that cutout area, solving a linear equation)	ML 03-1
MathLab 04	All the way Across Texas <i>Using a scale distance, find a distance on a map:</i> (Using a scale factor, ratios, solving a linear equation, and conversion of a “regular” fraction to a decimal fraction.)	ML 04-1
MathLab 05	The Celsius-Fahrenheit Mystery <i>Derive the function $C = (5/9)(F-32)$ and then verify with a dual scale thermometer.</i> (Using two points to find the equation of the line joining them, evaluating a linear function at a given value)	ML 05-1
MathLab 06	Definitely not the Straight and Narrow <i>Observe that some physical phenomena do not graph as linear functions:</i> (Record data as a scatter plot, draw a best fit for a scatter plot, exponential functions, asymptote.)	ML 06-1
MathLab 07	Weird Shapes <i>Find the volume of some irregular shapes such as lima beans and kidney beans:</i> (Volume as a displacement, division, subtraction of volumes, error reduction, the meaning of “per”)	ML 07-1
MathLab 08	A Pound of Feathers or a Pound of Lead? <i>Find the density of an irregular shape such as a kidney bean:</i> (Concept of density (mass per unit volume), division, the meaning of “per”, handling multiple dimensions)	ML 08-1
MathLab 09	Some More Beans, Please <i>Use physical data from an experiment using two different types of beans to write two equations in two unknowns and then solve for the number of each type of bean:</i> (Solution of two simultaneous equations for two unknowns. Interpolate reading on a graduated cylinder.)	ML 09-1

MathLab 10	The Sand Pile <i>Estimate the number of grains in one cubic inch of sand:</i> (Estimation techniques, scientific notation, conversion from inches to centimeters, volume of a rectangular solid, ratio, proportion)	ML 10-1
MathLab 11	How big is 49? <i>Estimate the number of grains of sand on all the beaches in the entire universe and gain a feeling for the influence of the exponent in scientific notation:</i> (Scientific notation, unit conversion, volume of a rectangular solid, addition of exponents, dimensional analysis)	ML 11-1
MathLab 12	With Each Swing of the Pendulum <i>Time the swing of a pendulum and investigate ways to get a more accurate time:</i> (Averaging, time measurement, linear measurement, statistical error reduction)	ML 12-1
MathLab 13	What? A Grandfather Clock? Verify that the theoretical period of a pendulum is close to that found experimentally. Calculate what the length of a pendulum should be so that its period is exactly one second: (Time measurement, linear measurement, conversion from centimeters to meters, square root, solving an equation, families of curves)	ML 13-1
MathLab 14	Does a pendulum cast a shadow? <i>Determine the position of the shadow (the projection) cast by a pendulum on the horizontal as a function of time:</i> (Function of time, projection, cosine)	ML 14-1
MathLab 15	Falling out of a Roller Coaster <i>Determine the speed at which people would begin to fall out of a roller coaster at the top of a loop:</i> (Square root, speed, radius, conversion from feet to miles and from sec to hrs)	ML 15-1
MathLab 16	The “Unabridged” Truth about Parabolas <i>Investigate the mathematical formula of the shape in which the cables of a suspension bridge hang:</i> (Equation of a parabola, solving a linear equation, catenary)	ML 16-1
MathLab 17	Is it really a parabola? <i>Using a graphing calculator to show that a string hangs in a parabolic shape:</i> (Equation of a parabola, quadratic regression, coordinates, best fit)	ML 17-1
MathLab 18	The Blacksmith and the Broken Wheel <i>Use construction techniques to show how to take a portion of a circle and find the center and radius:</i> (Geometry theorems, construction techniques, perpendicular bisector, chord, radius, center)	ML 18-1
MathLab 19	The “Focus” on Alternative Energy <i>Show that incoming rays parallel to the principle axis of a parabolic</i>	ML 19-1

reflector are reflected through the focal point. Relate to alternate sources of energy: (Equation of a parabola, circular approximation, reflection across a line. Geometrical construction techniques)

MathLab 20	Abstract Art and the Parabola <i>Demonstrate that all points on a parabola are equidistant from a fixed point (focus) and a fixed line (directrix):</i> (Parabola, focus, directrix, equal distances)	ML 20-1
MathLab 21	An Unusual Approach to Probability <i>Explore the idea that the sum of all probabilities is one, and then use it to solve a problem:</i> (Probability, sum of all probabilities, theoretical probability, experimental probability, solving a linear equation)	ML 21-1
MathLab 22	Wheel of Fortune <i>Show that the probability of a spinner landing on a particular segment is proportional to size (area) of that segment:</i> (Theoretical and experimental probability, percentage, area)	ML 22-1
MathLab 23	Slinky Secrets Revealed <i>Demonstrate that the force used to stretch a spring is proportional to the amount it stretches. Find the constant of proportionality:</i> (Direct variation, scatter-plot, slope, measuring with a ruler, linear regression)	ML 23-1
MathLab 24	Timing a Slinky Cycle <i>Demonstrate that a quadratic function of the time of one oscillation of a spring (slinky) predicts the weight hung on the end of the spring:</i> (Quadratic function evaluation, timing with a stopwatch)	ML 24-1
MathLab 25	Good “Times” With a Slinky <i>Experimentally determine the quadratic function of the period of oscillation of a spring that predicts the weight hung on the end of the spring:</i> (Quadratic equation, scatter-plot, quadratic fit, extrapolating a graph, reading a stopwatch.)	ML 25-1
MathLab 26	What? Linear Interpolation with a Slinky? <i>Learn the technique of linear interpolation and apply to (weight, time) points for a spring (miniature slinky):</i> (Linear interpolation, similar triangles, reading a stopwatch)	ML 26-1
MathLab 27	A Carpenter’s Trick. Replacing a Moldy Molding <i>Explore a geometric trick for translating a function:</i> (Translating a function)	ML 27-1
MathLab 28	Order emerges from chaos. The Monte Carlo Technique <i>Experimentally determine π using random numbers (random raindrops):</i> (Area of a circle, area of a square, ratio, proportion, random numbers)	ML28-1

- MathLab 29** Hiding a Telephone Pole ML 29-1
Use the Pythagorean theorem to find the longest diagonal within a rectangular solid: (Pythagorean Theorem, diagonals)
- MathLab 30** An Elevator That Moves Sideways ML 30-1
Use the Pythagorean Theorem to find the length of the path traveled by the diagonally moving elevators in the Luxor Hotel in Las Vegas: (Pythagorean Theorem, “dropping” a perpendicular from a point, segment bisection)



MathLab 09 – Some More Beans, Please

Purpose: Use physical data from an experiment using two different types of beans to write two equations in two unknowns and then solve for the number of each type of bean.

Math Principles: Solution of two simultaneous equations for two unknowns. Interpolate reading on a graduated cylinder.



Use two students to demo this lab:

1. Student 1 will record data on the board.
2. Student 2 will read the levels on a 25ml graduated cylinder.

Items needed: Water, 25 ml graduated cylinder, large lima beans, kidney beans. (Underlined items are supplied in the accompanying kit.)


What it's all about:

Knowing the **total volume** occupied by a combination of two different kinds of beans and knowing the **total bean count**, we are to determine the number of each type of bean. Solve by creating and then solving two linear equations.

In MathLab 07 the average volume for the two different types of beans (kidney and lima beans) was determined. Use those values (or your own) here:

Average volume of a single kidney bean = .5 ml

Average volume of a single lima bean = 1 ml



Add some water:

Have student # 2 fill the 25 ml graduated cylinder about half full of water and then read the level. Student # 1 will record the level on the board. In the picture to the left it is **14.1 ml**.

Keep it a secret:

Shield the lower part of the cylinder from the class and secretly drop in **7 kidney beans and 4 of the large lima beans**. These two numbers represent the answer to the problem for which the students will solve.

Read the new level:

With the “bean portion” of the graduated cylinder still shielded, have student #2 read the new level of water in the cylinder. Have Student # 2 record this new level. In the picture to the right it is **21.5 ml**.



Let them dry:

Remove the beans, blot with a paper towel and let them air dry out of site of the students. (Leaving the beans in the water will eventually make them swell and make them unsuitable for later use.)

**Make a guess:**

Before working the problem, let the students guess how many of each type of bean there are.

Two pieces of information:

The teacher will now give students the **necessary information** so they will be able to **set up to equations** and thus be able to say **how many** of each type of bean was placed in the cylinder.

The necessary information that we now have is:

1. The **total bean count** is 11.
2. The **total volume** occupied by all 11 beans is the difference in the two readings taken above: $21.5 \text{ ml} - 14.1 \text{ ml} = 7.4 \text{ ml}$

We must also use information mentioned above from MathLab 07 concerning the average volume of a single bean of each type:

$$\text{kidney bean volume} = .5 \text{ ml}, \quad \text{lima bean volume} = 1 \text{ ml}.$$

The two equations:

First we must define our variables:

L = number of lima beans

K = number of kidney beans

The first equation is for the **total bean count**:

$$\mathbf{L + K = 11}$$

The second equation expresses the total volume of the combination as the **sum of the volumes** of the two different bean types:

$$\mathbf{1L + .5K = 7.4}$$

Have your students solve these two equations for the variables L and K. The following shows how to do this using the elimination method:

$$\begin{array}{rcl} \text{Multiply by } -1 \rightarrow & -1(L + K) = (-1)11 & \rightarrow -1L - 1K = -11 \\ & 1L + .5K = 7.4 & \rightarrow \underline{1L + .5K = 7.4} \\ & & - .5K = -3.6 \\ & & K = -3.6/(-.5) = \mathbf{7.2 \text{ kidneys}} \end{array}$$

Substituting $K = 7.2$ into $L + K = 11$ we get:

$$\mathbf{L = 3.8 \text{ limas}}$$

Since we can only have a whole number of beans, round these answers to the nearest whole

number of beans and get:

L = 4 lima beans

K = 7 kidney beans



Enrichment activities:

Calculator activity

From the “Enrichment” portion of the DVD menu, see the video on how to solve the two equations graphically.

In depth questions:

- Why might we not always get integer answers for L and K?
If we used different beans in Lab 7 (where the volume was determined) than here, then because of the variation in the size of beans the volume readings may be in error. Also, all of the volume readings are just estimates.
- How could the accuracy of the lab results be improved?
Choose beans that are more uniform in size. Use a cylinder with finer graduations for more accurate volumes.
- For a small diameter cylinder the meniscus formed by the water becomes more apparent and affects the readings. What is a meniscus? **(Research required)**
It is the curved shape of the top of the liquid as it hugs the walls of the cylinder.
- What would be the result of leaving the beans in the water for an extended period of time and then trying to use them for a lab in a class later in the day?
The beans would swell and their volumes would be different from that determined in MathLab 07 thus making that data invalid for use in a later lab.



MathLab 18 – The Blacksmith and the Broken Wheel

Purpose: Use construction techniques to show how to take a portion of a circle and find the center and radius.

Math Principles: Geometry theorems, construction techniques, perpendicular bisector, chord, radius, center.

Use two students to demo this lab:


One student will create arcs with a compass and the other will draw lines with a straightedge.



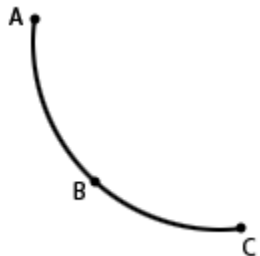
Items needed: White board compass, straightedge (Underlined item is supplied in the accompanying kit.)

What it's all about:

In the old days it was common for a blacksmith to be given a piece of a broken wheel and then be asked to make a replacement wheel. There was very little standardization of wheel sizes so he had to manually determine the radius of the broken wheel. If a full diameter of the wheel was still intact, all he had to do was measure that span and then divide by two. Occasionally only a fragment of a wheel was available as in the adjacent picture.



In that case the wheel was laid on the floor and with a compass improvised by tying a string to a nail; arcs were marked on the floor. The blacksmith then selected a straight piece of lumber and drew some intersecting lines to determine the center. Measuring from the center back to the wheel produced the desired radius.

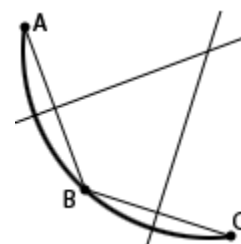


Begin with a piece of a circle. Mark three points:

The partial circle here represents our broken wheel. Mark three points on this arc. For greatest accuracy, place a point at each end of the arc. The third point can be placed somewhere near the center of the arc. (A student worksheet is provided on the last page of this lab so students can work along with the demonstration... or as an assignment sheet.)

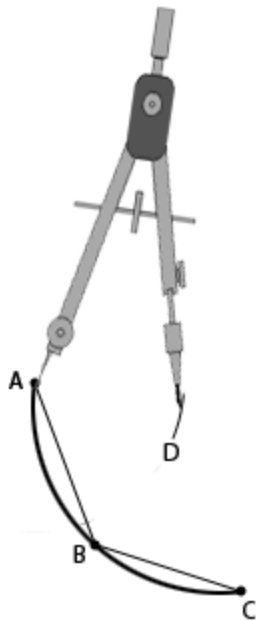
Here's the plan:

First, draw the two chords AB and BC. Then draw the perpendicular bisector of each. Extend these bisectors until they meet. That point will be the center of our circle. All we would have to do at this point is measure from that center to any point on the arc to get the radius.



Easier said than done:

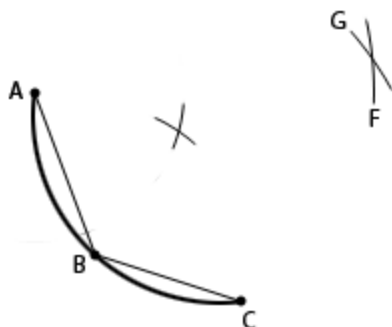
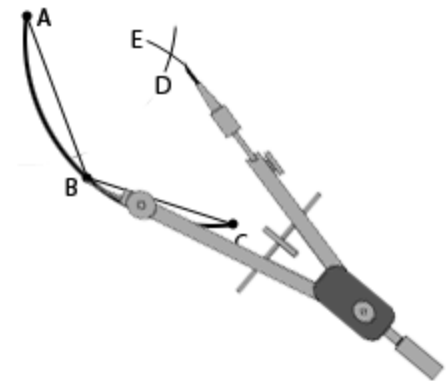
Ok, but how do we do it? Instead of scratching a nail mark on the floor and drawing a line with a piece of lumber, we will use a compass and ruler as shown in the diagrams that follow.

**Strike some arcs:**

Just bear in mind that the first three diagrams below produce two points that allow us to draw the perpendicular bisector of chord AB.

Begin by setting a spread on the compass a little larger than the length of AB. As shown in the picture to the left, put the point of the compass at A and strike arc D.

With this **same setting** on the compass, center the compass at point B and strike arc E as shown to the right. The intersection of arcs D and E establish one point on the perpendicular bisector that we will eventually draw.

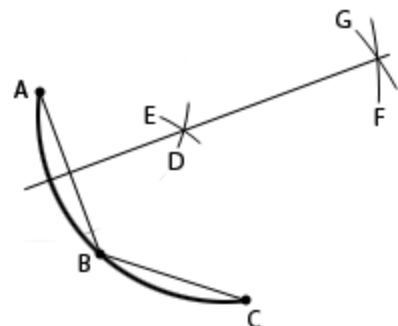


In a similar way with a **larger setting** on the compass, strike arcs F and G as shown in the picture to the left. The intersection of these two arcs defines the second point for our perpendicular bisector.

Draw the perpendicular bisector:

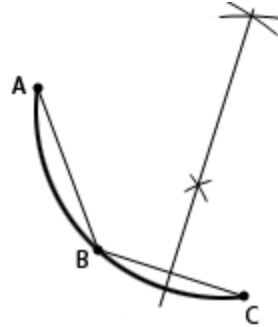
With a straightedge aligned to the points defined by the intersecting arcs just produced, draw the perpendicular bisector of chord AB. (Recall the theorem from geometry that says this bisector goes through the center of the circle.)

We still don't know where the center of the circle is, but at least we do know **it's somewhere** on the line just drawn.



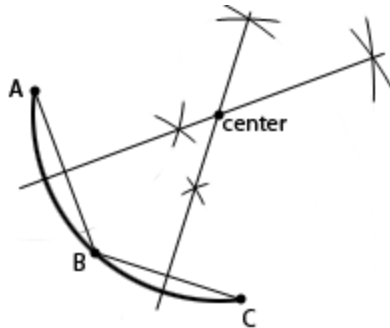
Do it again:

In exactly the same way that the perpendicular bisector of chord AB was produced, use a compass and a straightedge to similarly produce the perpendicular bisector of chord BC.



Locate the center:

The center of the circle is at the intersection of the two perpendiculars we have drawn.

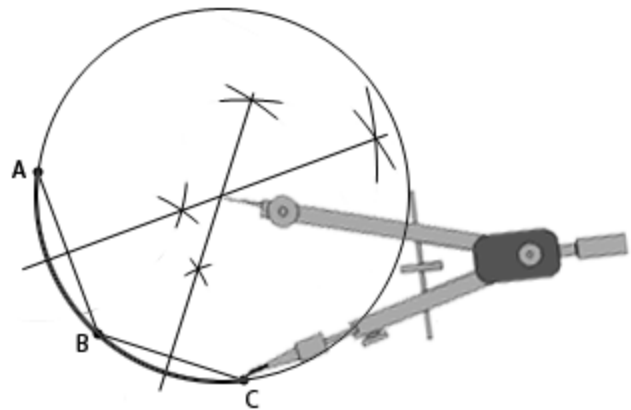


Why? Because the center of a circle is guaranteed to be on the perpendicular bisector of a chord of that circle. The intersection point of our two lines is the **only point** on **both** perpendicular bisectors, so it **must be the center of the circle**.

At this point the blacksmith would measure the distance from the center to **any point** on the circle to find the radius of the wheel.

How can we be sure it worked?

Still not convinced? Center the compass at the center point and open up the compass so it just touches point C. Then draw a full circle. Observe that it also **goes through points A and B** thus proving that we had found the true center.

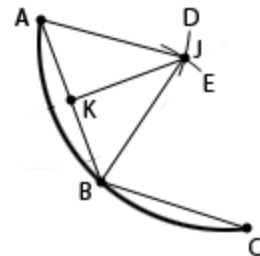


Enrichment activities:

Geometry proof:

Some students may have lingering doubts or curiosity about why these techniques work. Why does the line joining the intersecting arcs produce a perpendicular bisector of the chord?

The secret is to show triangles to be congruent: consider triangles AJK and BJK. Line segment AJ is equal in length to segment JB because they are both radii of the same circle. Both triangles share a common side. With these few hints, a well motivated student should be able to



extend the reasoning and see that the lines connecting the intersecting arcs are, indeed, perpendicular bisectors of the chords.

Calculator Activity # 1:

Show how to graph a circle. Two equations will be needed since solving for y in the equation for a circle centered at the origin, $x^2 + y^2 = r^2$, produces a plus or minus... ($y = \pm\sqrt{r^2 - x^2}$)

Calculator Activity # 2:

Consider a more general equation of a circle that is **not** centered at the origin:

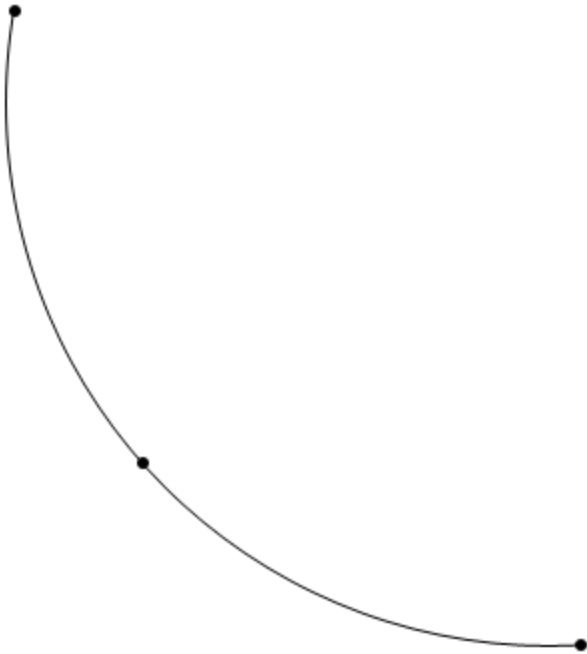
$$(x - h)^2 + (y - k)^2 = r^2, \quad y = \pm\sqrt{r^2 - (x - h)^2} + k$$

Show how to graph this general circle using two different functions (one for the plus and one for the minus).

In depth questions:

1. When we measured from the center to any of points A, B, or C to obtain the radius, were there other point to which we could have measured?
2. Why would it be important for blacksmith to use a non stretchable string?
3. Would the perpendicular bisector of a fourth chord have passed through the intersection point of the first two?
4. In choosing the three points on the arc, why is it important not to choose points that are near each other?
5. Is it always possible to find a circle that will pass through three noncollinear points?
6. Is it always possible to find a circle that will pass through four noncollinear points?

Student work sheet for MathLab 18






MathLab 21 – An Unusual Approach to Probability

Purpose: Explore the idea that the sum of all probabilities is one, and then use it to solve a problem.

Math principles/concepts: Probability, sum of all probabilities, theoretical probability, experimental probability, solving a linear equation.



Use three students to demo this lab:

Two students will operate the two spinners while the third records the results on the board.

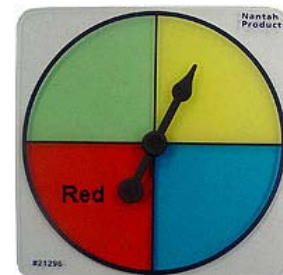
Items needed: Four-segment spinner, five-segment spinner (Underlined items supplied in the accompanying kit.)

What it's all about:

Consider the two probability spinners shown here. We are interested in when the spinners stop on the red sections. The probability of getting a red with the four-segment spinner is $\frac{1}{4}$ since there are four different colored segments but only one that is red. Similarly, the five-segment spinner's probability of coming up red is $\frac{1}{5}$.



The problem we are to solve here is to find the probability of getting **at least one red** when considering **both spinners simultaneously**.



Experimental determination:

With two students operating the spinners, have them spin both devices while the third records a tally on the board of **both** the total number of trials **and** the number of successes. Emphasize that a **success could either be just one red or both red**.

Do at least 20 trials and more if time permits. Make sure the students understand that the greater the number of trials done, the closer will be the agreement of this experimental probability (**successes/trials**) with the theoretical probability.

Trials	Successes

Theoretical determination:

Begin with a discussion and emphasis on the fact that the sum of the probabilities of all possibilities is one. This may be a new concept to students, so make sure they understand since it is at the very heart of this lab.

An example, students might relate to a weather prediction of 75 % rain. Of course, this means a 25% chance of no rain. Point out that these two probabilities add to 100% which is equivalent to a probability of one.

With regard to getting a red with the two spinners, all possible probabilities are:

$$\begin{aligned} P_0 &= \text{probability of no reds} \\ P_1 &= \text{probability of exactly one red} \\ P_2 &= \text{probability of two reds} \end{aligned}$$

Expressing the sum of these probabilities, we get the fundamental equation with which we will solve our problem:

$$P_0 + P_1 + P_2 = 1$$

At this point it is important for the students to realize that the probability we want (the probability of getting at least one red) is the **probability of getting exactly one red plus the probability of getting two reds**. This can be expressed as:

$$P_1 + P_2$$

Rewrite the “sum” equation, isolate these two terms in parenthesis, and then subtract P_0 from both sides:

$$\begin{aligned} P_0 + (P_1 + P_2) &= 1 \\ (P_1 + P_2) &= 1 - P_0 \end{aligned}$$

Instead of finding two probabilities (P_1 & P_2) and adding them, we have the easier task of finding P_0 and subtracting it from 1:

$$P_0 = (\text{prob of no red on spinner}_5) \times (\text{prob of no red on spinner}_4)$$

$$P_0 = \frac{\# \text{ of non reds}}{5 \text{ spaces}} \times \frac{\# \text{ of non reds}}{4 \text{ spaces}}$$

$$P_0 = \frac{4}{5} \times \frac{3}{4} = \frac{12}{20}$$

Finally, the solution is:

$$P_1 + P_2 = 1 - P_0 = 1 - \frac{12}{20} = \frac{8}{20} = \frac{2}{5} = .4$$

Enrichment activities:**Calculator Activity # 1:**

In the theoretical analysis above, we looked at P_1 , the probability of getting exactly one red. Actually, there are **two** ways to get a single red: “spinner₄ is red and spinner₅ is not” or “spinner₅ is red and spinner₄ is not”. In other words, with two items from which to choose, there are two different ways to choose a single item.

This gets into the realm of “combinations” upon which so much probability theory is so heavily dependent. For example, the meaning of ${}_5C_3$ is the number of ways 3 items can be selected from among 5: ${}_5C_3 = \frac{5!}{(5-3)!3!} = 10$

This calculator activity demonstrates how to evaluate ${}_nC_r$ on a graphing calculator.

Calculator Activity # 2:

In Calculator activity #1 above, mention was made of factorials. For example, 5! is read, “five factorial” and simply means $5! = 5 \cdot 4 \cdot 3 \cdot 2 \cdot 1 = 20$. In this calculator activity, factorials are demonstrated on the graphing calculator.

In depth questions:

1. Since probabilities can't exceed 1, how can the probability of rain be 25% since 25 is greater than 1.
2. Suppose in addition to the 4 and 5 color spinners we additionally have a 6 color spinner that also has just one red section. Spinning all three simultaneously, what would be the probability of at least one red?
3. For the 4-color spinner, would it be possible to spin a million times and never get a red?
4. For the 4-color spinner, would we be more likely to get 30,000 reds or 300,000 reds when spinning a million times? Why?
5. What is the probability for an event that is absolutely certain to happen?
6. What is the probability for an event that is absolutely certain not to happen?
7. Is it possible for a probability to be negative?



MathLab 23 – Slinky Secrets Revealed

Purpose: Demonstrate that the force used to stretch a spring is **proportional** to the amount it stretches. Find the constant of proportionality.

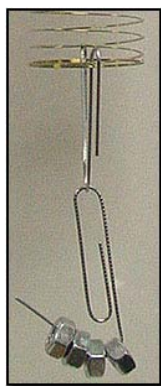
Math principles/concepts: Direct variation, scatter-plot, slope, measuring with a ruler, linear regression.

Use three students to demo this lab:

One student will hang weights on and stabilize the slinky, another will mark positions of the stretched spring, and the third will record data on the board.



Items needed: Miniature slinky(spring), nuts(1/4 – 20), centimeter rule. (Underlined items supplied in the accompanying kit.)



What it's all about:

The amount of force (F) needed to stretch a spring varies directly as the amount of stretch (x). The equation that describes this is:

$$F = (\text{const})x.$$


In this lab the stretching force is provided by the weight of nuts hung on the end of a spring (slinky). Since this weight is proportional to the number of nuts, the equation will be modified to the following where N is the number of nuts:

$$N = kx$$

Marks will be made on the background (chalk board or white board) as several nuts are successively placed on the hanger. Distances between the marks are measured for later analysis in which the constant of proportionality will be determined.

Insert the top hanger:

Use the provided square-top hanger so as to provide a means of hanging the slinky from a hook such as those typically found at the top of white boards. With the fingers, separate **two rings** of the slinky from the others and insert the square-top hanger as shown to the right.





Hang:

Hang from a hook that will allow the slinky to hang down in front of a chalk board or white board.


...or use a ruler:

If such a hanger is not available, hang a ruler over the edge of a table as shown in the picture to the right and secure with tape. Again, only use **two rings** of the slinky on top of the ruler. By hanging from only two rings, your students should get data similar to that shown on the following pages.



Insert the bottom hanger:



Use the provided pointed hanger so as to provide a means of hanging weights (nuts) on the slinky. With the fingers, separate **two rings** of the slinky from the others and insert the pointed hanger as shown to the right.

**Attach the nut hanger:**

Finally, attach the nut hanger (yes, it's a paperclip) as shown to the left. The nuts will be hung on the protruding segment.

Mark the starting point:


With the spring hung as shown to the right and **with no added weights**, stabilize it (stop it from bouncing and shaking) and mark the bottom of the spring. **All measurements will be referenced from this point.** Make sure the student marking this and following positions has his **eyes level** with the bottom of the spring so as to accurately mark the true position.

**Place one nut on the hanger:**

Gently hang one nut on the hanger, stabilize the spring (stop it from bouncing and shaking), mark the position, and label with "1". Again, make sure eye level is at the bottom of the spring so as to place an accurate mark.

Continue adding weight:

One at a time, add nuts (up to a total of four) to the hanger. Each time mark the position of the bottom of the spring and record the number of nuts beside each mark. The picture to the right shows the marks and labeling after all four nuts have been attached.

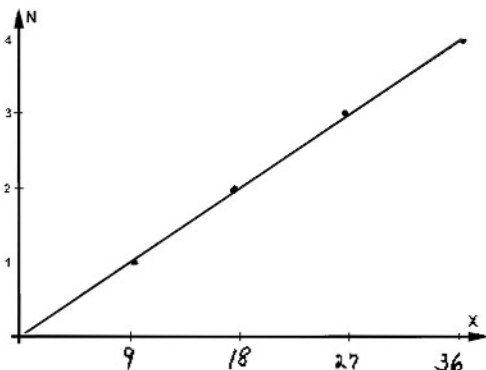
**Measure the distances:**

Using a centimeter ruler, measure the distances of each position of the spring (1, 2, 3, & 4) **from the zero mark** as shown to the left.

Completing the measurements:

After all four measurements are taken they should be close to those shown to the right only if the bottom and top hangers for the slinky were each hung on **two rings** (see pages 1 & 2). Different readings will also be the result of a distorted slinky (caused by excessive stretching). If any of these things happen in your case, **you will still get valid results** for your lab: they will just be different from those results shown here. Please note that all these readings are in centimeters.

—	0
9.1	— 1
18.3	— 2
27.2	— 3
36.4	— 4

**Putting it all together:**

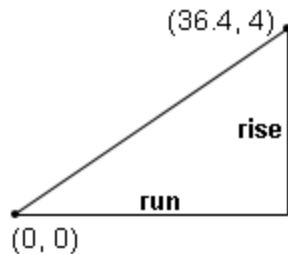
Using the graph paper provided as the last page of this lab, tape one piece to the board and have a student make a scatter-plot of the points with a large black marker. Be sure to make enough copies of the graph paper so that all the students in the class can participate. The results should look something like the adjacent drawing.

Notice that the line that best fits the data is drawn. See Calculator Activity #1 and #2 for a demonstration of how to display these scatter-plot points along with a best-fit

line (linear regression). Also, notice that this graph is consistent with the equation $N = kx$ since both have a y-intercept (actually an N intercept) of zero.

Finding the constant of proportionality:

Determine the constant of proportionality (k , also the slope of the line) for this line as follows:



Since the line goes through the origin, use $(0, 0)$ as one point and $(36.4, 4)$ as the other. The slope (and therefore k) is:

$$k = \frac{\text{rise}}{\text{run}} = \frac{N_2 - N_1}{x_2 - x_1} = \frac{4 - 0}{36.4 - 0} = \frac{4}{36.4} = .10989$$

Finally, the complete linear function is:

$$F = .10989x$$

Enrichment activities:**Calculator Activity # 1:**

Use “scatter-plot” on the calculator to display the data points (9.1, 1), (18.3, 2), (27.2, 3), and (36.4, 4).

Calculator Activity # 2:

Using the points entered in Calculator Activity # 1, perform a linear regression and graph the resulting best-fit line simultaneously with the scatter plot.

In depth questions:

1. Using the equation for the number of nuts ($N = .10989x$), what would be the number of nuts if the amount of stretch is 54.6 cm?
2. From physics what is the name of the law that expresses $F = kx$ where F is the force, k is the spring constant, and x is the amount of stretch. (Research needed)
3. Rewrite the function $N(x) = kx$ so that instead of N being a function of x , x is a function of N .
4. If we had nuts that weighed 1.5 times as much as those used in this lab, how much would 3 nuts stretch the spring?
5. When a linear regression is done on the calculator the N -intercept is $-.00539721$ whereas it's theoretical value is 0. Why the difference?

Paperclip templates used with the miniature slinky spring.



Square top hanger




Pointed bottom hanger



Nut hanger

Graph Paper for MathLab 23



Index

abstract art	ML20-1
acceleration of gravity	ML13-2
alternative energy	ML19-1
angle of deflection	ML12-1
area	ML02-1, ML22-1, ML28-1
astronomer	ML11-3
asymptote	ML06-1, ML22-2
average	ML12-1
beach	ML11-1
beans	ML07-1, ML08-1, ML09-1
best fit	ML06-1, ML17-1, ML23-1, ML25-1
bisector	ML18-1, ML30-2
blacksmith	ML18-1
blindfold	ML27-1
bob (pendulum)	ML14-1
boiling point	ML05-1
bridge	ML16-1
broken wheel	ML18-1
bullet	ML08-2
cc (cubic centimeter)	ML02-4
cubic centimeter	ML10-1
Celsius	ML05-1
center	ML18-1
carpenter	ML27-1
catenary	ML16-1
cables, bridge	ML16-1
centimeter-inch conversion	ML10-1, ML13-1
chaos	ML28-1
chord	ML18-1
circle	ML18-1, ML24-1, ML28-1
circular approximation	ML19-1
circular cylinder	ML29-3
collinear points	ML18-4
compass	ML18-1, ML19-1, ML20-1, ML26-1
concave	ML27-3, ML15-2
concave down	ML15-2
concave up	ML15-2
cone	ML01-1
constant of proportionality	ML23-1
construction, geometry	ML18-1, ML19-2, ML20-1
country	ML11-1
cosine	ML14-1
cross multiplication	ML01-2, ML03-1, ML04-2, ML10-2, ML11-2, ML26-2, ML28-2
cubic inch	ML10-1, ML11-1
cup	ML01-1
density	ML08-1

dependent variable	ML06-1, ML15-2, ML24-2
diagonal	ML04-2, ML29-1, ML30-1
diameter	ML01-1, ML02-1, ML18-1, ML27-3
directrix	ML20-1
direct variation	ML23-1, ML28-1
Egypt	ML30-1
elastic limit	ML25-1
elevator	ML30-1
error reduction	ML07-1, ML12-1
estimation	ML10-1, ML11-1, ML25-1
exponential function	ML06-1
exponents	ML11-1
extrapolate	ML25-1
Fahrenheit	ML05-1
family of curves	ML13-1
feet-mile conversion	ML15-1
focal point	ML19-1, ML20-1
focus	ML19-1, ML20-1
force	ML23-1
freezing point	ML05-1
frustum	ML02-1
fraction conversion	ML04-1
funnel	ML10-2
galaxy	ML11-1
general equation of a parabola	ML17-1
grandfather clock	ML12-1
graduated cylinder	ML02-1, ML07-1, ML09-1, ML10-1
gravity	ML13-2
hangers	ML23-1, ML23-6
hypotenuse	ML29-1, ML30-2
ice	ML06-1
inch-centimeter conversion	ML10-1, ML13-1
inclinator	ML30-1
independent variable	ML06-1, ML15-1, ML24-2
inequality	ML19-3
infinity	ML27-3
inscribe	ML28-1
interpolate	ML09-1, ML26-1
irregular shape	ML03-1, ML07-1
kidney beans	ML07-1, ML08-1
Las Vegas	
lima beans	ML07-1
linear equation	ML01-1, ML03-1, ML04-1, ML05-1, ML06-1, ML16-1, ML21-1, ML23-4
linear interpolation	ML26-1
linear regression	ML23-1
Luxor Hotel	ML30-1
magnifier	ML10-1, ML30-1
map	ML03-1, ML04-1
mile-feet conversion	ML15-1

miniature slinky	ML23-1, ML24-1, ML25-1, ML26-1
Monte Carlo technique	ML28-1
molding	ML27-1
mole	ML11-1
money	ML11-1
nail	ML18-1
nut	ML23-1, ML24-1, ML25-1, ML26-1
origin	ML16-1, ML18-4, ML20-1
oscillation	ML12-2, ML13-2, ML26-2
paperclip	ML23-2
parabola	ML16-1, ML17-1, ML19-1, ML20-1
parabolic reflector	ML19-1
pendulum	ML12-1, ML13-1, ML14-1
per	ML07-1, ML08-1
percentage	ML22-1
period	ML13-1, ML14-1, ML24-1
perpendicular	ML18-2, ML19-1, ML30-2
perpendicular bisector	ML18-2, ML30-2
physics	ML23-5
Pi (π)	ML13-1, ML28-1
pin-the-tail-on-the-donkey	ML28-1
plane surface	ML30-1
principle axis	ML19-1
probability	ML21-1, ML22-1
projection	ML14-1
proportion	ML01-3, ML03-1, ML10-2, ML11-1, ML22-1, ML28-1
proportional	ML23-1, ML28-1
pyramid	ML30-1
Pythagorean Theorem	ML29-1, ML30-1
quadratic	ML17-1, ML24-1, ML25-1
quadratic regression	ML17-1, ML25-1
radius	ML15-1, ML18-1
rain drops	ML28-1
random numbers	ML28-1
ratio	ML03-1, ML04-1, ML10-2, ML28-1
rays	ML19-1
reading a ruler	ML01-1, ML02-1
rectangular solid	ML29-1
reflection	ML19-1
regression	ML17-1, ML23-1
restricting a graph	ML19-3
right circular cylinder	ML29-3
roller coaster	ML14-1
ruler	ML01-1
sand	ML10-1, ML11-1
scale distance	ML04-1
scale factor	ML04-1
scales, gram	ML03-1, ML08-1, ML10-1
scatter plot	ML01-1, ML06-3, ML17-3, ML23-5, ML25-2
scientific notation	ML11-3

scissors	ML03-1
sec-hour conversion	ML15-1
semicircle	ML27-1
shadow	ML14-1
similar triangles	ML01-1, ML26-2
simultaneous equations	ML09-1
slinky	ML23-1, ML24-1, ML25-1, ML26-1
slope	ML01-1, ML23-1
solving simultaneous equations ..	ML09-1
speed	ML15-1
spinner	ML21-1, ML22-1, ML24-1, ML25-1, ML26-1
spring	ML23-1, ML24-1, ML25-1, ML26-1
square shape.....	ML28-1
square root	ML13-1, ML15-1
steel ball	ML12-1, ML13-1, ML15-1
stopwatch	ML12-1, ML13-1, ML24-1, ML25-1, ML26-1
string	ML12-1, ML13-1, ML16-1, ML17-1, ML18-1
sun	ML19-1
suspension bridge	ML16-1
telephone pole	ML29-1
temp. compensated pendulum ...	ML13-3
Texas	ML03-1, ML04-1
thermometer	ML05-1, ML06-1
three dimensions	ML29-1
time measurement	ML12-1, ML24-1, ML25-1, ML26-1
translate	ML27-1
translating a function	ML27-1
triangle	ML01-2, ML26-2, ML30-2
universe	ML11-2
vertex	ML17-3, ML20-1
volume	ML02-1, ML07-1, ML08-1
volume of a cone	ML02-1
volume of weird shapes	ML01-1
washer	ML26-1
weight	ML03-1
weird shapes	ML01-1
wheel	ML18-1
wheel of fortune	ML22-1
white board compass	ML18-1, ML19-1, ML20-1, ML26-1
Wikipedia	ML03-1